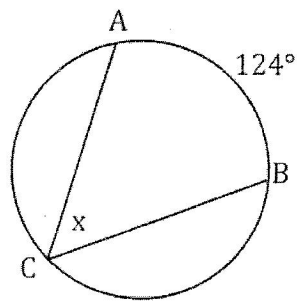
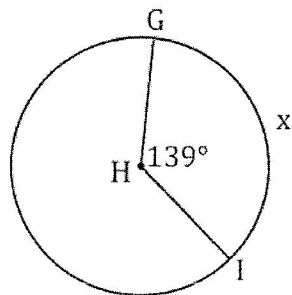


For these... find the value of x. Show all your work...

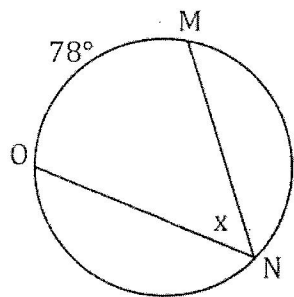
1.



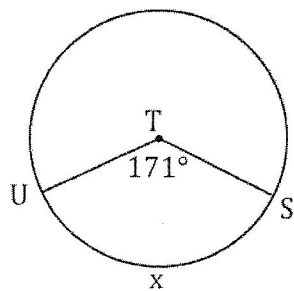
3.



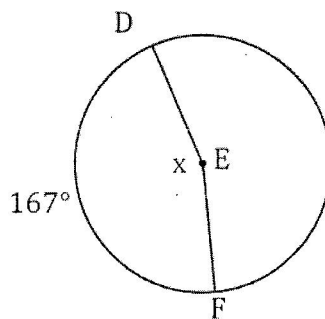
5.



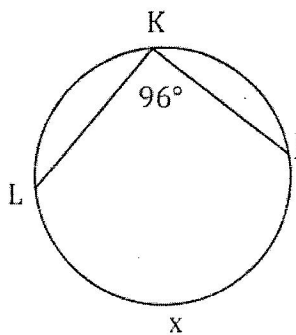
7.



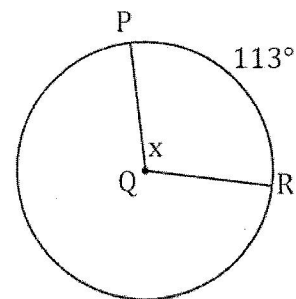
2.



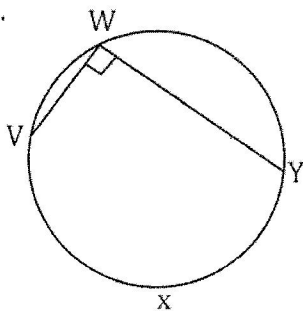
4.



6.



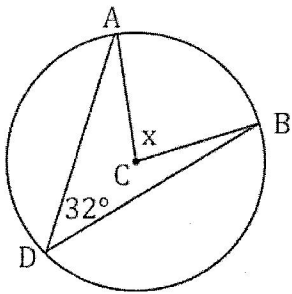
8.



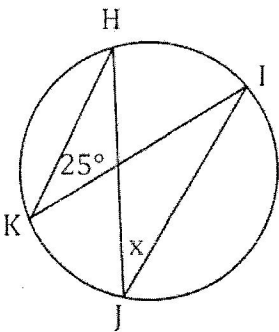
Bubble all the correct answers from above. Don't bubble incorrect answers.

- $352^\circ$ 
  $90^\circ$ 
  $39^\circ$ 
  $171^\circ$ 
  $192^\circ$ 
  $124^\circ$ 
  $69.5^\circ$ 
  $180^\circ$ 
  $139^\circ$ 
  $83.5^\circ$ 
  $226^\circ$ 
  $113^\circ$ 
  $167^\circ$ 
  $62^\circ$

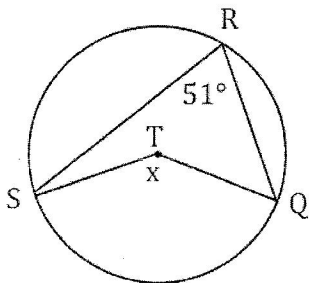
9.



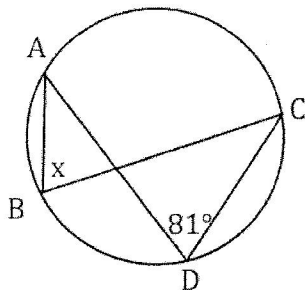
11.



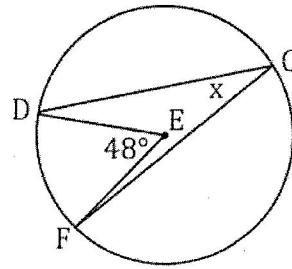
13.



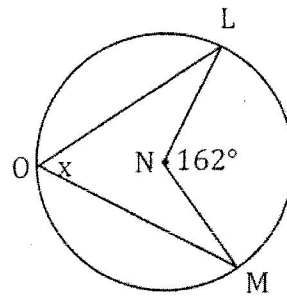
15.



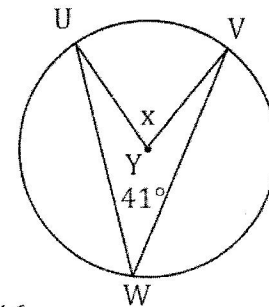
10.



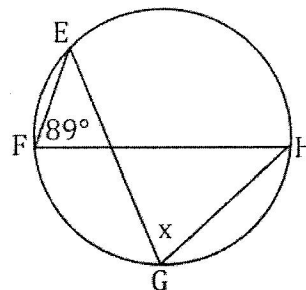
12.



14.

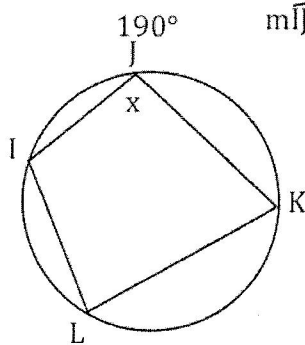


16.



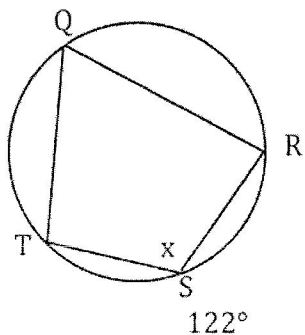
Bubble all the correct answers from above. Don't bubble incorrect answers.

17.  $m\widehat{IJK} = 190^\circ$

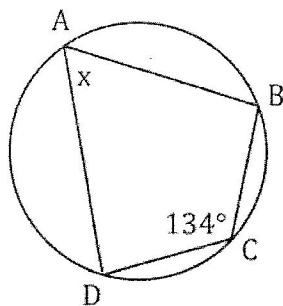


First find  $m\widehat{KLI}$ .  
 $m\widehat{IJK} + m\widehat{KLI} = 360^\circ$   
 $m\widehat{IJK} + m\widehat{KLI} = 360^\circ$   
 $190^\circ + m\widehat{KLI} = 360^\circ$   
 $-190^\circ \quad -190^\circ$   
 $m\widehat{KLI} = 170^\circ$   
 Then find  $m\angle J$ .  
 $m\angle J = 1/2 m\widehat{KLI}$   
 $x = 1/2 (170^\circ)$   
 $x = 85^\circ$

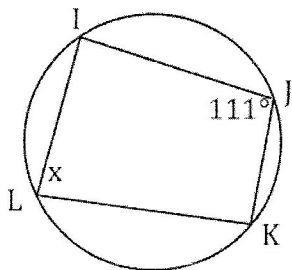
19.  $m\widehat{RST} = 122^\circ$



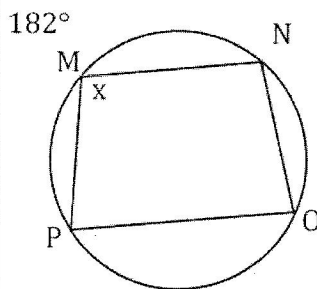
21.



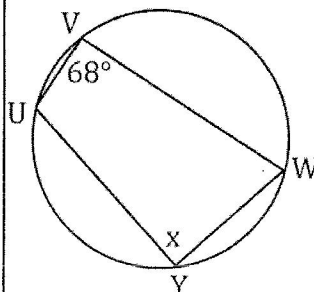
23.



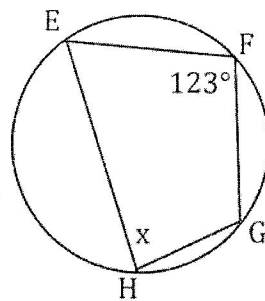
18.  $m\widehat{PMN} = 182^\circ$



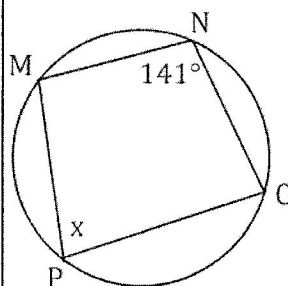
20. First find  $m\widehat{UYW}$ .



22.



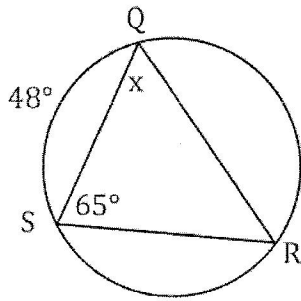
24.



Bubble all the correct answers from above. Don't bubble incorrect answers.

- 114° 
  56° 
  69° 
  57° 
  47° 
  119° 
  231° 
  46° 
  39° 
  85° 
  89° 
  162° 
  136° 
  224°

25.



First find  $m\angle R$ .  
 $m\angle R = 1/2 m\widehat{QS}$   
 $m\angle R = 1/2(48^\circ)$   
 $m\angle R = 24^\circ$

Then find  $m\angle Q$ .  
 Use the triangle sum theorem!

$$m\angle Q + m\angle R + m\angle S = 180^\circ$$

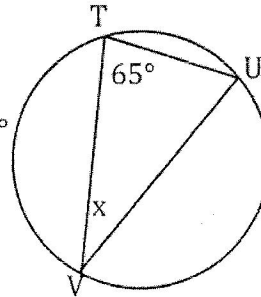
$$x + 24^\circ + 65^\circ = 180^\circ$$

$$x + 89^\circ = 180^\circ$$

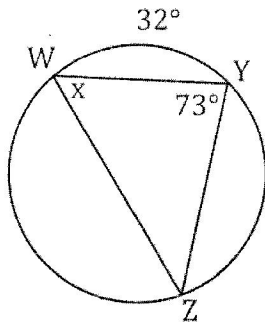
$$-89^\circ \quad -89^\circ$$

$$x = 91^\circ$$

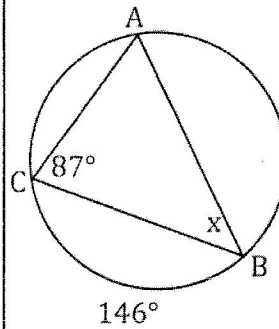
26.



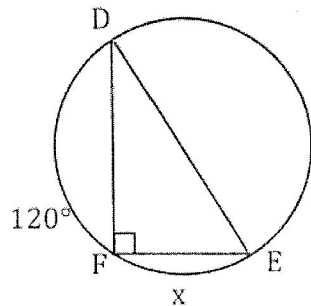
27.



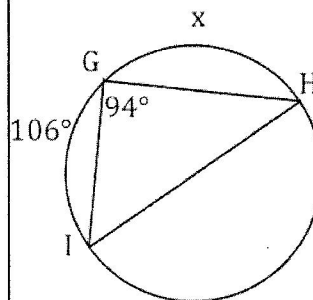
28.



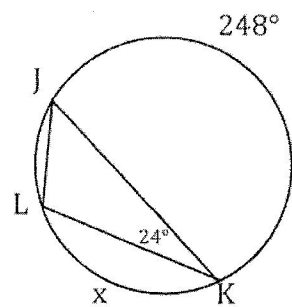
29.



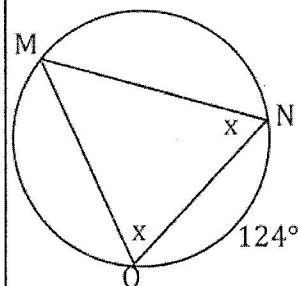
30.



31.



32.



Bubble all the correct answers from above. Don't bubble incorrect answers.

- 87°  
  46°  
  18°  
  94°  
  91°  
  20°  
  44°  
  66°  
  64°  
  16°  
  60°  
  46°  
  91°  
  78°